







Sprawdź, czy umiesz posługiwać się zegarem






3

1. Zapisz, którą godzinę pokazują zegary.



2. Dorysuj wskazówki na zegarach tak, żeby pokazywały podane godziny.

3




3.00

7.00

12.00

3. Oblicz i zapisz, ile godzin upłynęło.


4



od 2.00 do 4.00 –




od 3.00 do 7.00 –



od 8.00 do 11.00 –



od 12.00 do 3.00 –



Ocena / komentarz:

10

Oblicz sumy pisemnym sposobem.

$$\begin{array}{r} 23 \\ + 6 \\ \hline \end{array}$$

$$\begin{array}{r} 73 \\ + 5 \\ \hline \end{array}$$

$$\begin{array}{r} 34 \\ + 3 \\ \hline \end{array}$$

$$\begin{array}{r} 54 \\ + 4 \\ \hline \end{array}$$

$$\begin{array}{r} 12 \\ + 7 \\ \hline \end{array}$$

$$\begin{array}{r} 32 \\ + 46 \\ \hline \end{array}$$

$$\begin{array}{r} 37 \\ + 52 \\ \hline \end{array}$$

$$\begin{array}{r} 43 \\ + 34 \\ \hline \end{array}$$

$$\begin{array}{r} 87 \\ + 12 \\ \hline \end{array}$$

$$\begin{array}{r} 12 \\ + 76 \\ \hline \end{array}$$

$$\begin{array}{r} 112 \\ + 234 \\ \hline \end{array}$$

$$\begin{array}{r} 334 \\ + 452 \\ \hline \end{array}$$

$$\begin{array}{r} 736 \\ + 263 \\ \hline \end{array}$$

$$\begin{array}{r} 321 \\ + 678 \\ \hline \end{array}$$

$$\begin{array}{r} 456 \\ + 233 \\ \hline \end{array}$$

$$\begin{array}{r} 104 \\ + 340 \\ \hline \end{array}$$

$$\begin{array}{r} 346 \\ + 253 \\ \hline \end{array}$$

$$\begin{array}{r} 137 \\ + 642 \\ \hline \end{array}$$